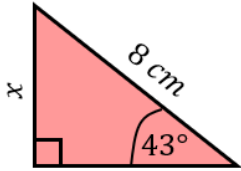
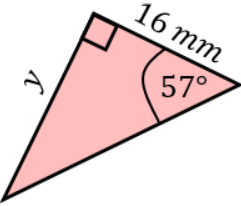
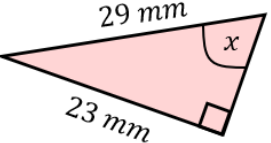
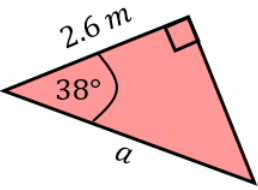
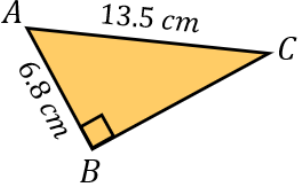
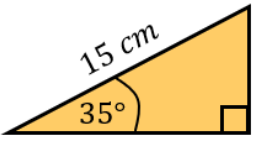
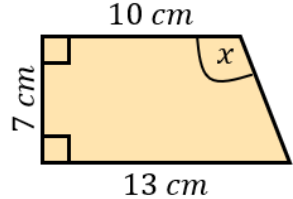
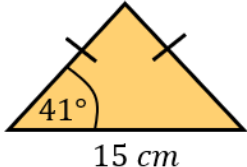
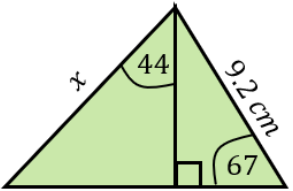
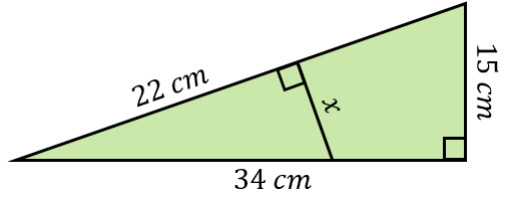


Trigonometry Revision

(a)	(b)	(c)	(d)
<p>Find the value of x, to 1 decimal place.</p> 	<p>Find the value of y to 3 significant figures.</p> 	<p>Find angle x, to 1 decimal place.</p> 	<p>Find the value of a, to 1 decimal place.</p> 
(e)	(f)	(g)	(h)
<p>Find angle ACB to 3 significant figures.</p> 	<p>Find the perimeter of the triangle to 1 decimal place.</p> 	<p>Find angle x to 3 significant figures.</p> 	<p>Find the area of the isosceles triangle to 1 decimal place.</p> 
(i)	(j)	(k)	
<p>Find the length x to 3 significant figures.</p> 	<p>Find the value of x, giving your answer to 3 significant figures.</p> 	<p>Find the exact value of x.</p> 