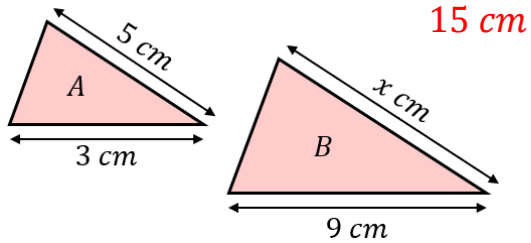


Similar Shapes

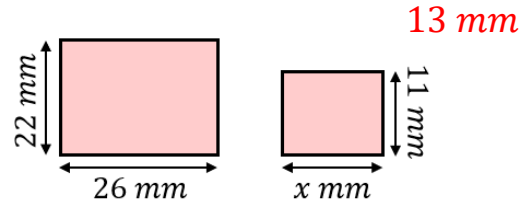
(a)

Triangles *A* and *B* are similar. Find the missing length x .



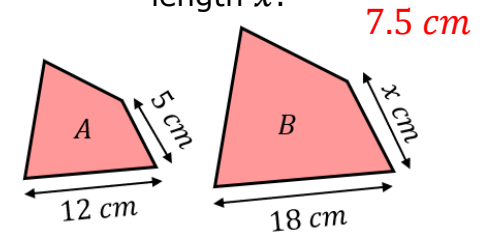
(b)

The two rectangles shown are similar. Find the missing length x .



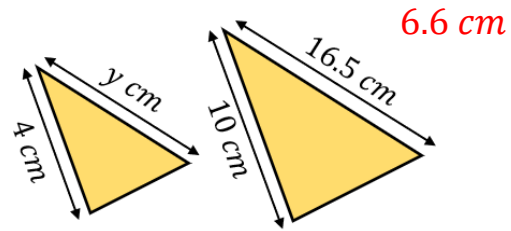
(c)

Shapes *A* and *B* are similar. Find the length x .



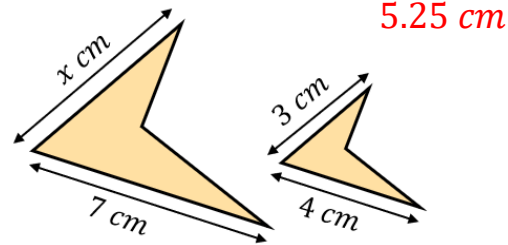
(d)

The two triangles shown are similar. Find the missing length y .



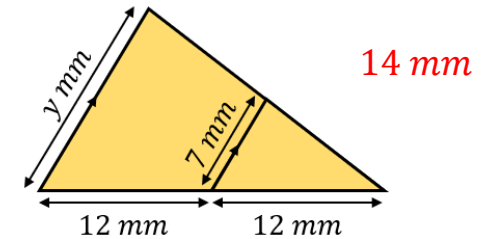
(e)

The two shapes shown are similar. Find the length x .



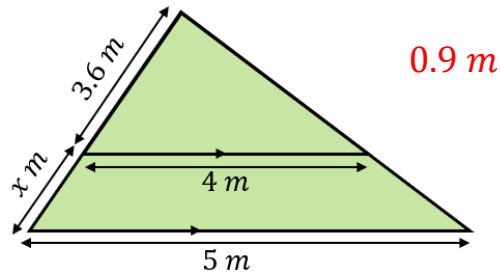
(f)

Find the missing length y cm.



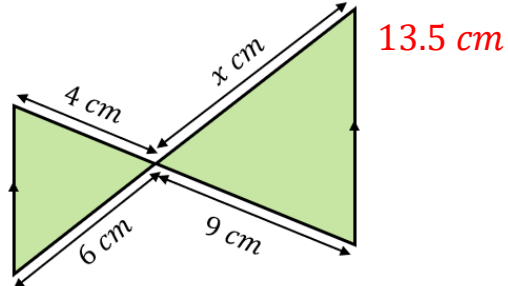
(g)

Find the missing length x .



(h)

Find the missing length x in cm.



(i)

Find the missing length y .

