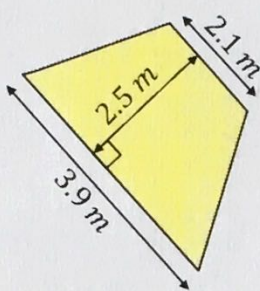
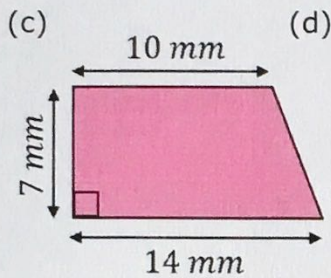
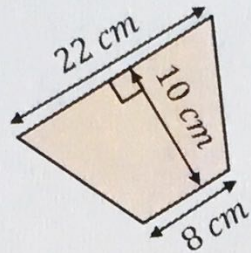
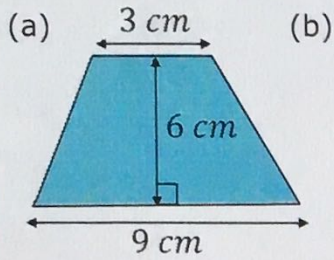


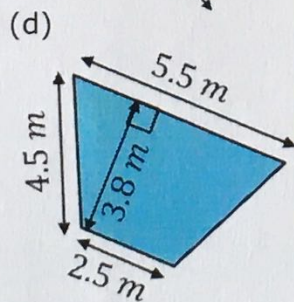
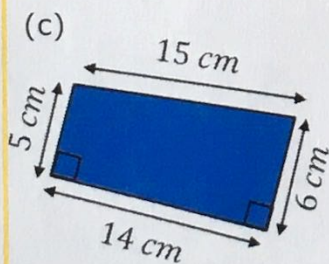
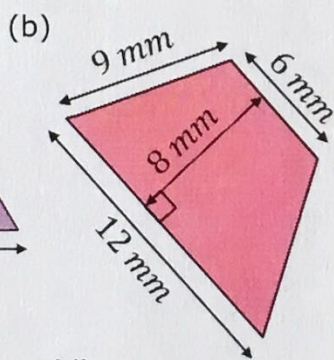
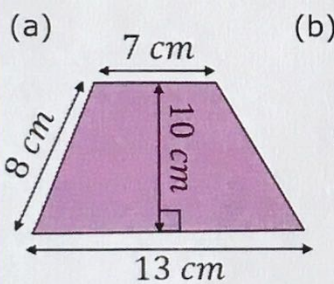
Area of a Trapezium

Find the area of each of these trapezia.
Give units with your answer.



- (a) 36 cm^2
 (b) 150 cm^2
 (c) 84 mm^2
 (d) 7.5 m^2

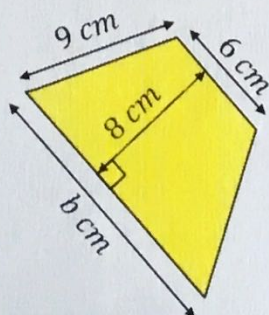
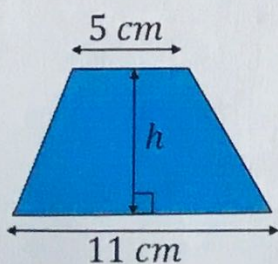
Calculate the area each of these trapezia.
Give units with your answer.



- (a) 100 cm^2
 (b) 72 mm^2
 (c) 77 cm^2
 (d) 15.2 m^2

Find the missing measurements in each of these trapezia given their areas.

(a) Area = 48 cm^2 (b) Area = 72 cm^2



- (a) $h = 6 \text{ cm}$
 (b) $b = 12 \text{ cm}$