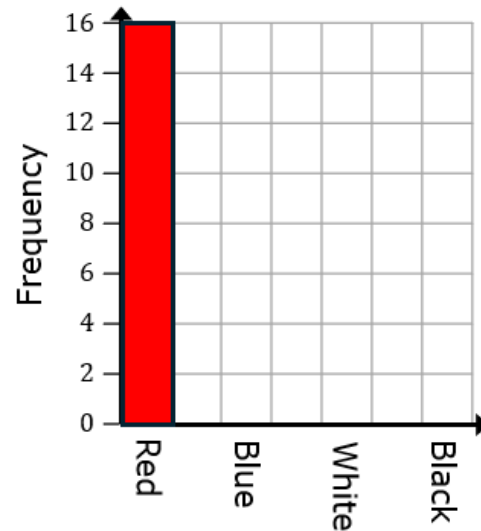


Constructing Bar Charts

(a)

The table shows the number of different coloured cars recorded one day. Complete the bar chart to represent the data.

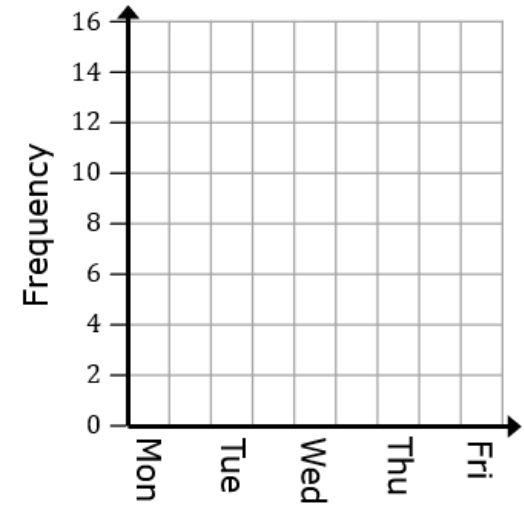
Colour	Frequency
Red	16
Blue	2
White	9
Black	14



(b)

The table shows the number of students receiving merits on each day of a week. Draw a bar chart to represent the data.

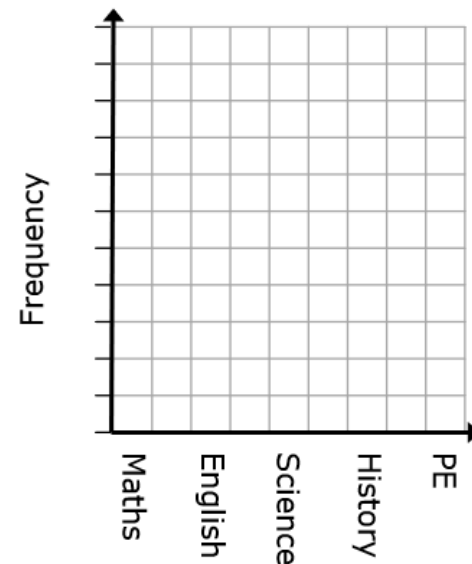
Day	Frequency
Monday	14
Tuesday	7
Wednesday	10
Thursday	0
Friday	9



(c)

40 children were surveyed about their favourite subject at school. Complete the table and draw a bar chart.

Subject	Frequency
Maths	9
English	6
Science	11
History	
PE	4



(d)

The table shows the number of books read by students in a month. They read 50 books in total. Ava read twice as many books as Dinah. Complete the table and draw a bar chart.

Student	Frequency
Ava	
Bola	20
Cerys	9
Dinah	

