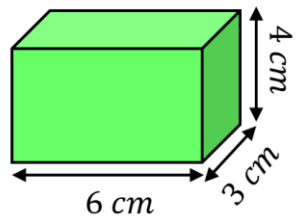
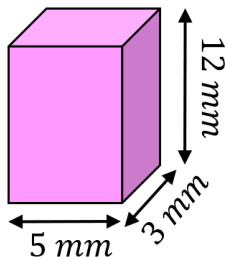


Volume of a Cuboid

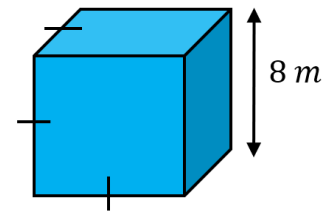
Find the volume of each of these cuboids. Include units with your answers.



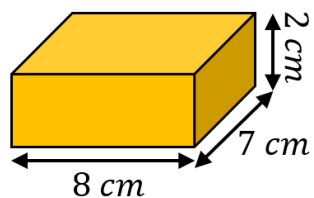
72 cm^3



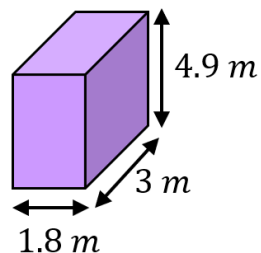
180 mm^3



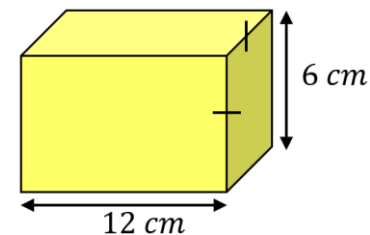
512 m^3



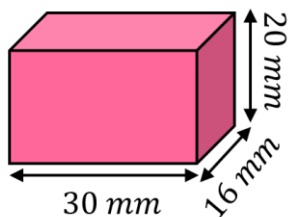
112 cm^3



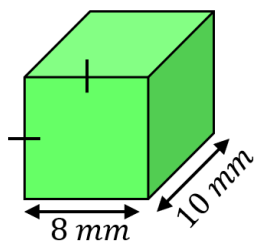
26.46 m^3



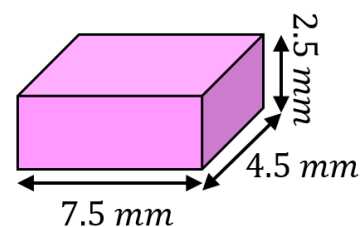
432 cm^3



9600 mm^3

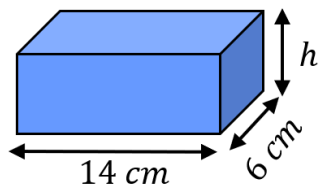


640 mm^3



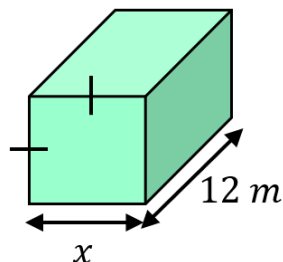
84.375 mm^3

Find the missing measurements in these cuboids.



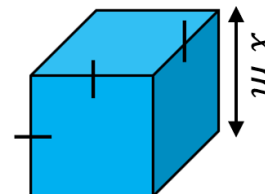
$Volume = 210 \text{ cm}^3$

$h = 2.5 \text{ cm}$



$Volume = 507 \text{ m}^3$

$x = 6.5 \text{ cm}$



$Volume = 1331 \text{ m}^3$

$x = 11 \text{ m}$