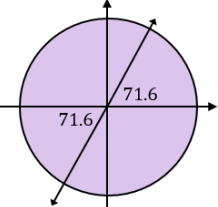
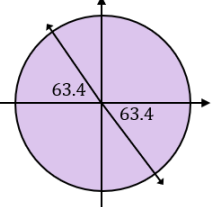
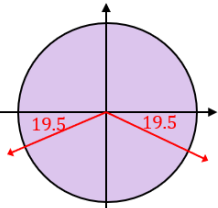
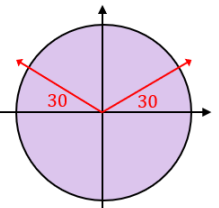
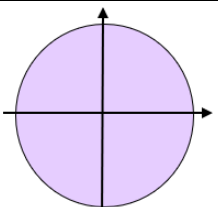
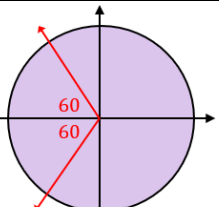
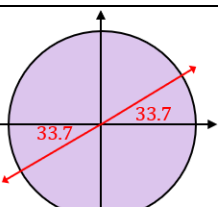
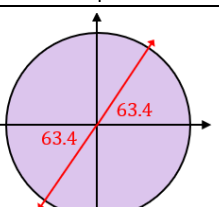
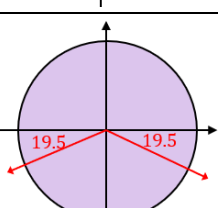
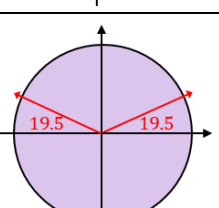


# Fill in the Blanks

# Solving Quadratic Trigonometric Equations

Question	Factorise and Solve	Solve 1 <sup>st</sup> Trig Equation	Solve 2 <sup>nd</sup> Trig Equation
<p>Solve <math>\tan^2\theta - \tan\theta - 6 = 0</math> for <math>0^\circ \leq \theta &lt; 360^\circ</math></p>	$(\tan\theta - 3)(\tan\theta + 2) = 0$ $\tan\theta = 3$ or $\tan\theta = -2$	 <p><math>\theta = \tan^{-1}(3)</math>  <math>\theta = 71.6^\circ</math>  <math>\theta = 71.6^\circ, 251.6^\circ</math></p>	 <p><math>\theta = \tan^{-1}(2)</math>  <math>\theta = 63.4^\circ</math>  <math>\theta = 116.6^\circ, 296.6^\circ</math></p>
<p>Solve <math>6\sin^2\theta - \sin\theta - 1 = 0</math> for <math>-180^\circ \leq \theta &lt; 180^\circ</math></p>	$(3\sin\theta + 1)(2\sin\theta - 1) = 0$ $\sin\theta = -\frac{1}{3}$ or $\sin\theta = \frac{1}{2}$	 <p><math>\theta = \sin^{-1}\left(\frac{1}{3}\right)</math>  <math>\theta = 19.5^\circ</math>  <math>\theta = -19.5^\circ, -160.5^\circ</math></p>	 <p><math>\theta = \sin^{-1}\left(\frac{1}{2}\right)</math>  <math>\theta = 30^\circ</math>  <math>\theta = 30^\circ, 150^\circ</math></p>
<p>Solve <math>2\cos^2\theta + 7\cos\theta + 3 = 0</math> for <math>0^\circ \leq \theta &lt; 360^\circ</math></p>	$(\cos\theta + 3)(2\cos\theta + 1) = 0$ $\cos\theta = -3$ or $\cos\theta = -\frac{1}{2}$	 <p>No Solutions</p>	 <p><math>\theta = \cos^{-1}\left(\frac{1}{2}\right)</math>  <math>\theta = 60^\circ</math>  <math>\theta = 120^\circ, 240^\circ</math></p>
<p>Solve <math>3\tan^2\theta - 8\tan\theta + 4 = 0</math> for <math>-180^\circ \leq \theta &lt; 180^\circ</math></p>	$(3\tan\theta - 2)(\tan\theta - 2) = 0$ $\tan\theta = \frac{2}{3}$ or $\tan\theta = 2$	 <p><math>\theta = \tan^{-1}\left(\frac{2}{3}\right)</math>  <math>\theta = 33.7^\circ</math>  <math>\theta = 33.7^\circ, -146.3^\circ</math></p>	 <p><math>\theta = \tan^{-1}(2)</math>  <math>\theta = 63.4^\circ</math>  <math>\theta = 63.4^\circ, -116.6^\circ</math></p>
<p>Solve <math>9\sin^2\theta - 1 = 0</math> for <math>0^\circ \leq \theta &lt; 360^\circ</math></p>	$(3\sin\theta + 1)(3\sin\theta - 1) = 0$ $\sin\theta = -\frac{1}{3}$ or $\sin\theta = \frac{1}{3}$	 <p><math>\theta = \sin^{-1}\left(\frac{1}{3}\right)</math>  <math>\theta = 19.5^\circ</math>  <math>\theta = 199.5^\circ, 340.5^\circ</math></p>	 <p><math>\theta = \sin^{-1}\left(\frac{1}{3}\right)</math>  <math>\theta = 19.5^\circ</math>  <math>\theta = 19.5^\circ, 160.5^\circ</math></p>