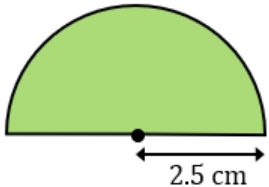
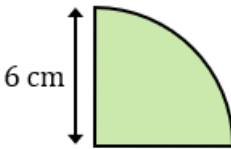
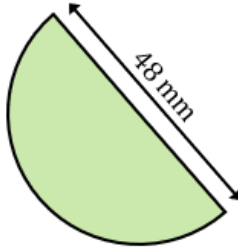

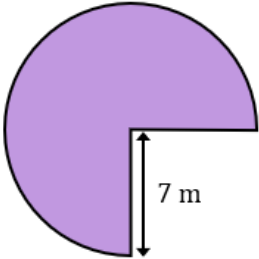
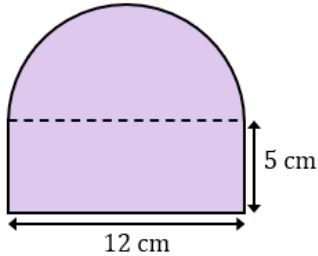


Areas of Semicircles and Quarter Circles

(a)	(b)	(c)	(d)
Find the area of a semicircle with a radius of 9 cm	Find the area of a semicircle with a radius of 25 mm	Find the area of a semicircle with a radius of 1.7 m	Find the area of a semicircle with a diameter of 16 cm
(e)	(f)	(g)	(h)
Work out the area of a quarter circle with a radius of 4.5 cm	Work out the area of a quarter circle with a radius of 0.6 m	Work out the area of a quarter circle with a radius of 26 mm	Work out the area of a quarter circle with a diameter of 6 cm
(i)	(j)	(k)	(l)
Calculate the area 	Calculate the area 	Calculate the area 	Calculate the area 
(m)	(n)	(o)	
Calculate the area 	Calculate the area 	Calculate the area 