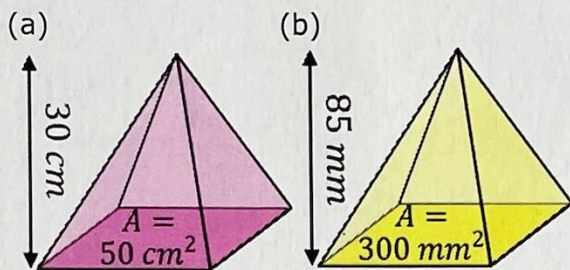


Volume of a Pyramid

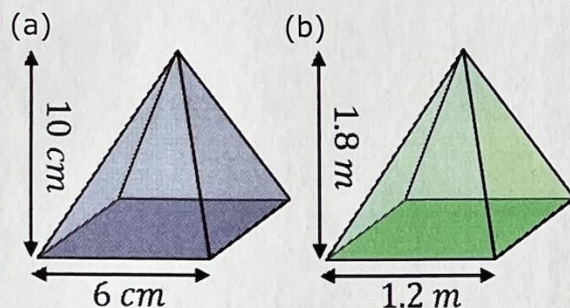
Find the volume of each of these pyramids.



(a) 500 cm^3

(b) 8500 mm^3

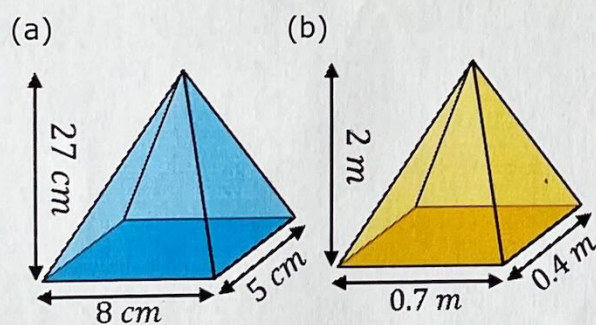
Find the volume of each of these square-based pyramids.



(a) 120 cm^3

(b) 0.864 m^3

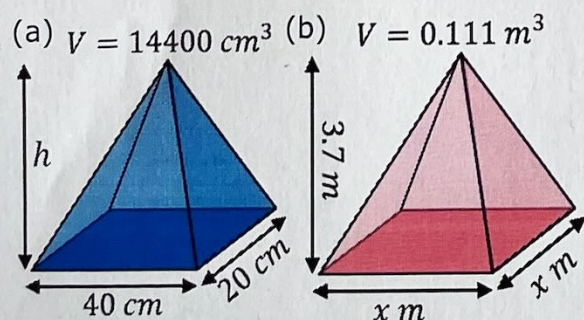
Find the volumes of each of these pyramids.



(a) 360 cm^3

(b) 0.186 m^3

Find the missing measurements from each of these pyramids when given their volumes.



(a) $h = 54 \text{ cm}$

(b) $x = 0.3 \text{ m}$