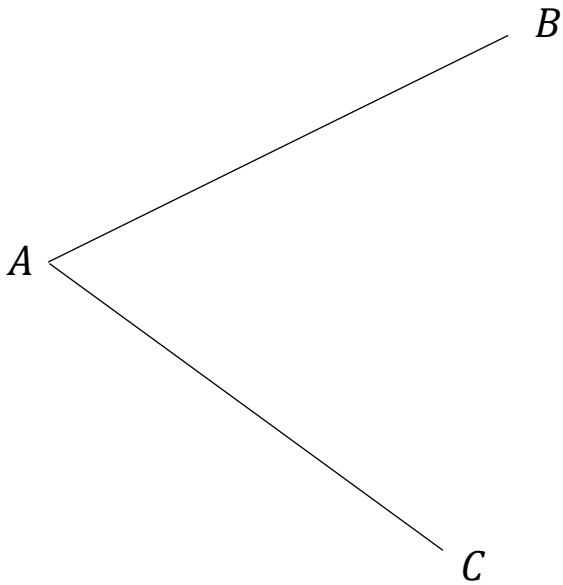


Constructing Perpendiculars and Bisectors

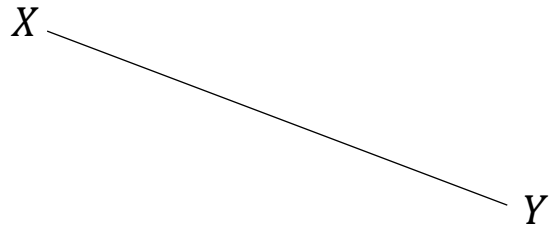
(a)

Construct the bisector of the angle BAC.



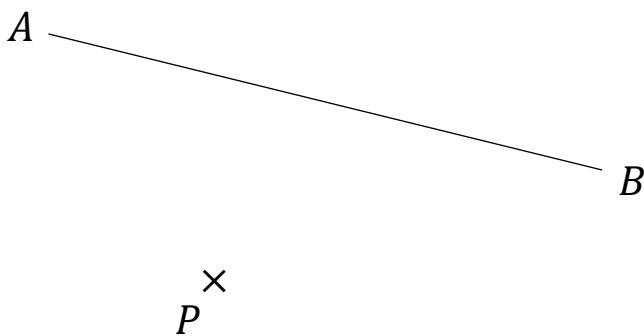
(b)

Construct the perpendicular bisector of the line XY.



(c)

Construct the perpendicular to the line AB that passes through point P.



(d)

Construct the perpendicular to the line CD that passes through point P.

