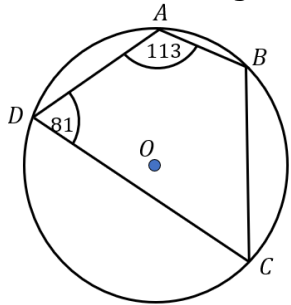


Mixed Circle Theorems

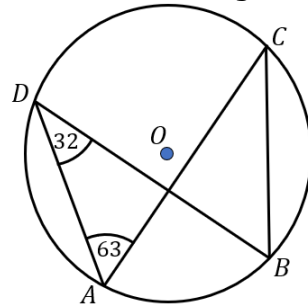
(a)

Find the size of angle BCD



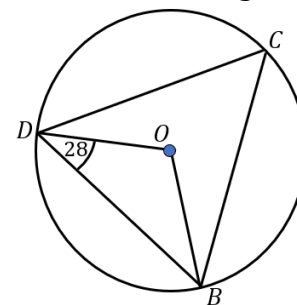
(b)

Find the size of angle CBD



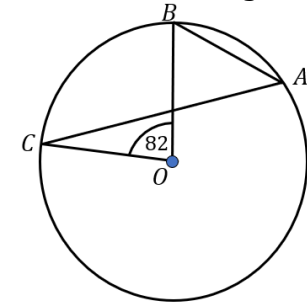
(c)

Find the size of angle DCB



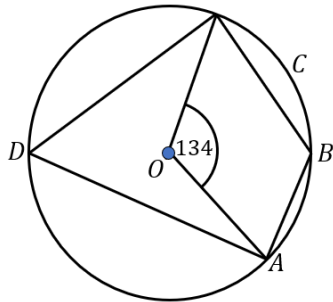
(d)

Find the size of angle BAC



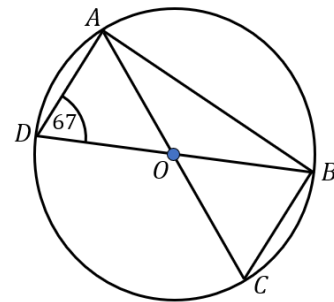
(e)

Find the size of angle ABC



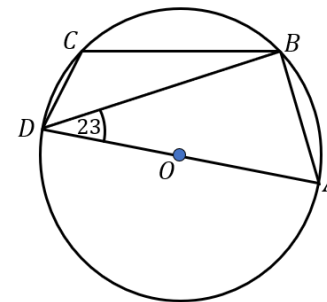
(f)

Find the size of angle OBC



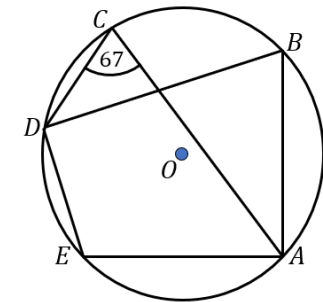
(g)

Find the size of angle BCD



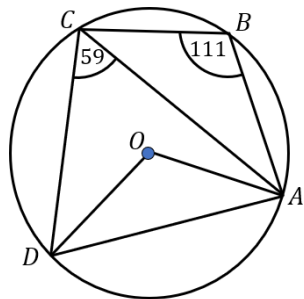
(h)

Find the size of angle AED



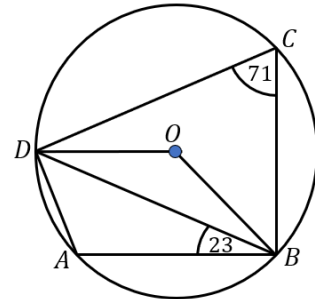
(i)

Find the size of angle ODC



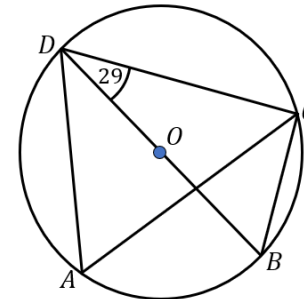
(j)

Find the size of angle ODA



(k)

Find the size of angle CAD



(l)

Find the size of angle CED

