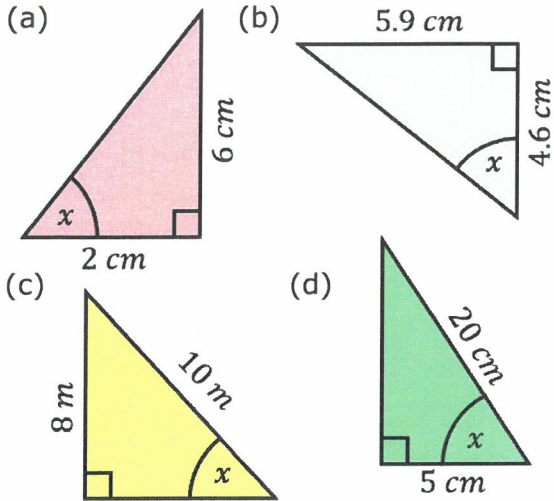


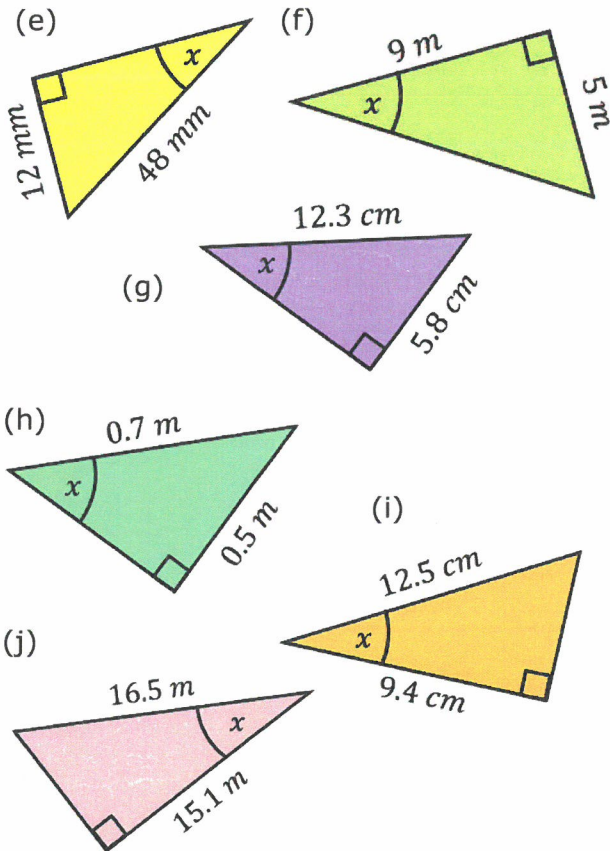
**Finding Angles Using Trigonometry**

Find the value of the labelled angles.



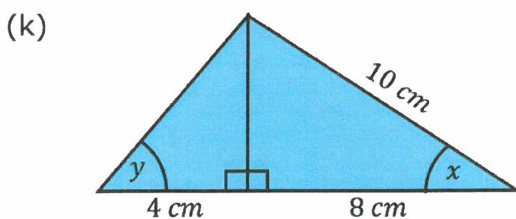
- (a)  $71.6^\circ$
- (b)  $52.1^\circ$
- (c)  $53.1^\circ$
- (d)  $75.5^\circ$

Find the value of the labelled angles.



- (e)  $14.5^\circ$
- (f)  $29.1^\circ$
- (g)  $28.1^\circ$
- (h)  $45.6^\circ$
- (i)  $41.2^\circ$
- (j)  $23.8^\circ$

Find the missing angles.



$x = 36.9^\circ$   
 $y = 56.3^\circ$