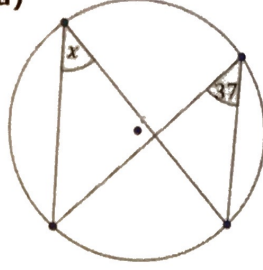
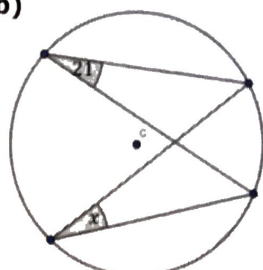
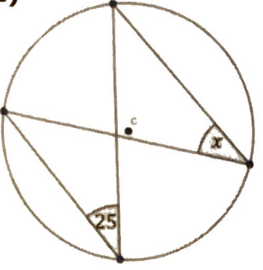
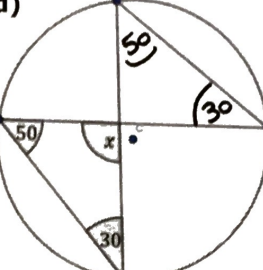
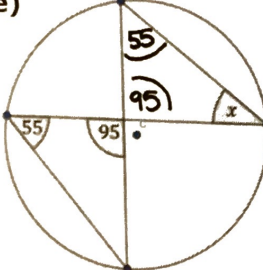
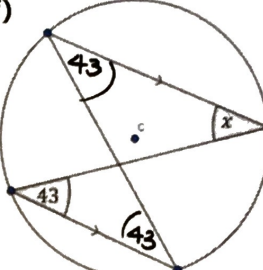
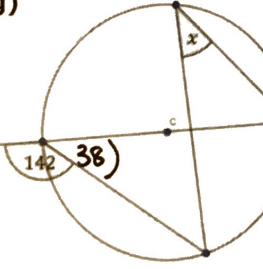
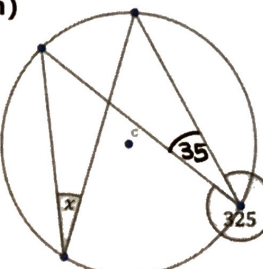

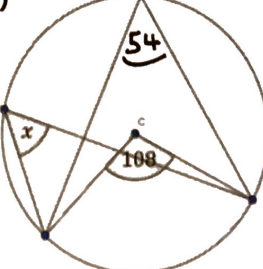


ANGLES FROM THE SAME SEGMENT PRACTICE GRID

Find the missing angles.

| | |
|---|---|
| <p>(a)</p>  <p>$x = 37^\circ$</p> | <p>(b)</p>  <p>$x = 21^\circ$</p> |
| <p>(c)</p>  <p>$x = 25^\circ$</p> | <p>(d)</p>  <p>$x = 100^\circ$</p> |
| <p>(e)</p>  <p>$x = 40^\circ$</p> | <p>(f)</p>  <p>$x = 43^\circ$</p> |
| <p>(g)</p>  <p>$x = 38^\circ$</p> | <p>(h)</p>  <p>$x = 35^\circ$</p> |
| <p>(i)</p>  <p>$x = 47^\circ$</p> | <p>(j)</p>  <p>$x = 54^\circ$</p> |