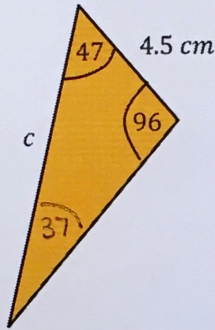
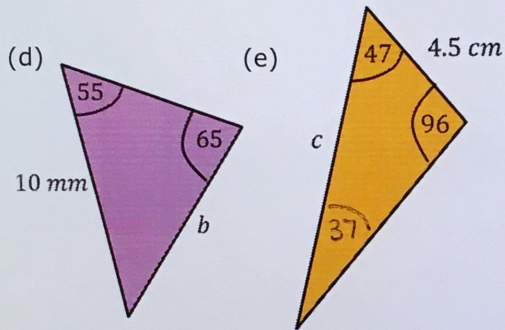
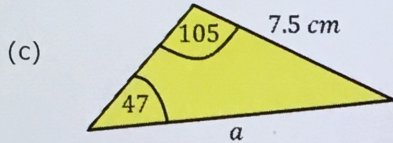
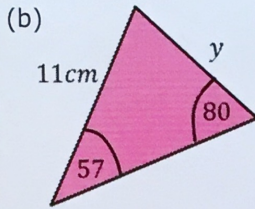
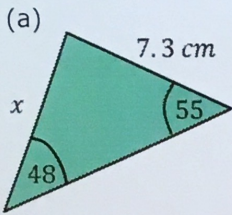


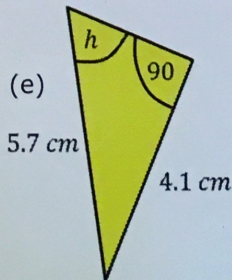
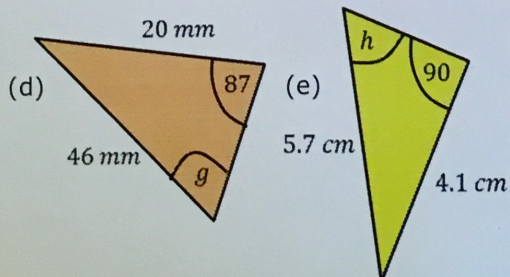
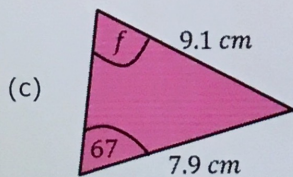
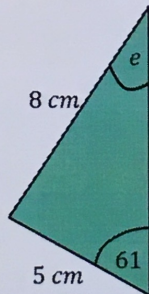
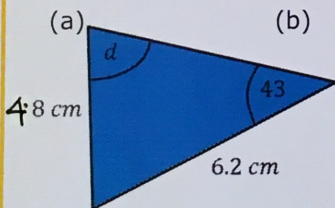
Sine Rule

Find the missing length.



- (a) 8.0 cm
- (b) 9.4 cm
- (c) 9.9 cm
- (d) 9.0 mm
- (e) 7.4 cm

Find the missing angle.



- (a) 61.8°
- (b) 33.1°
- (c) 53.0°
- (d) 25.7°
- (e) 46.0°