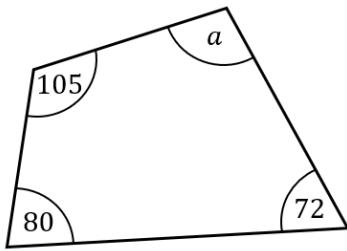


Circle Theorems and Quadrilaterals

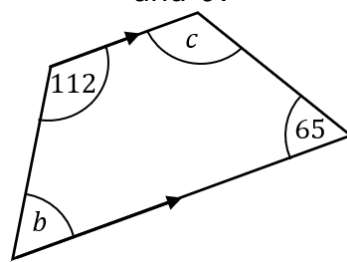
(a)

Find the missing angle a .



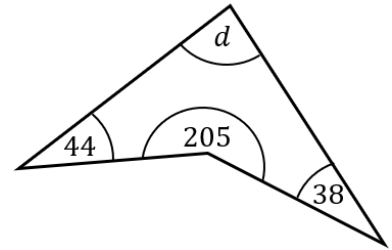
(b)

Find the missing angles b and c .



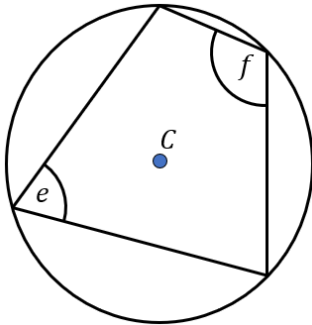
(c)

Find the missing angle d .



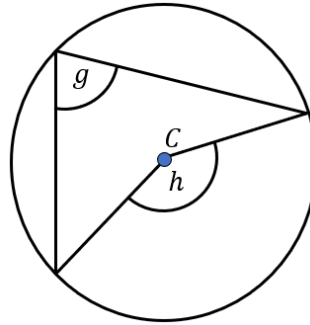
(d)

What is the relationship between angles e and f ?



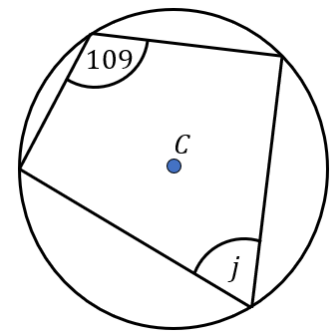
(e)

What is the relationship between angles g and h ?



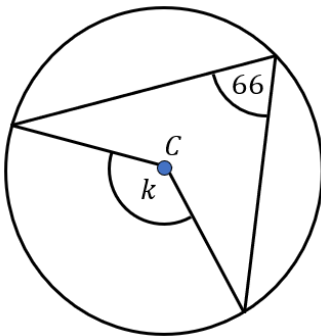
(f)

Find the value of j .



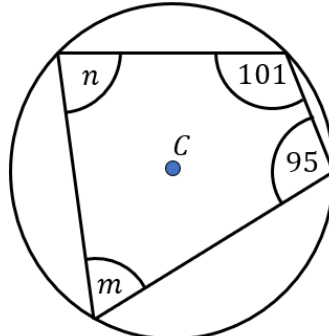
(g)

Find the value of k .



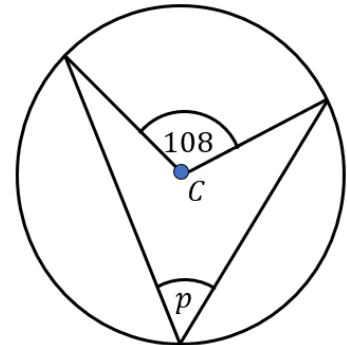
(h)

Find the values of m and n .



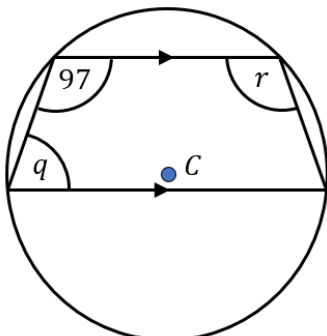
(i)

Find the value of p .



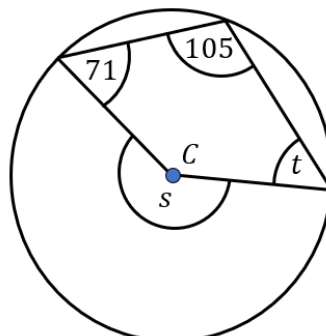
(j)

Find the values of q and r .



(k)

Find the values of s and t .



(l)

Find the values of u and v .

