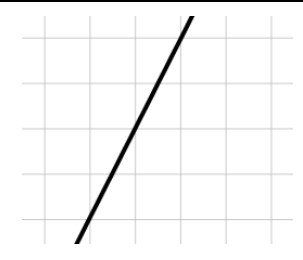
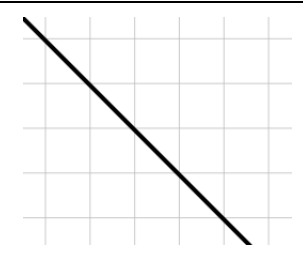

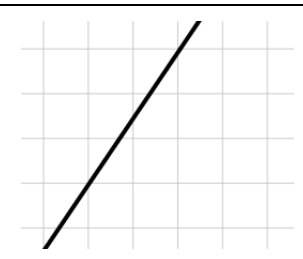




Match-Up

Finding Gradients of Straight Lines

1	
2	
3	
4	
5	
6	

7	The line joining (0, 0) and (2, 2)
8	The line joining (1, 2) and (3, 10)
9	The line joining (-2, 0) and (1, 9)
10	The line joining (5, 2) and (-1, -2)
11	The line joining (-2, 7) and (2, 1)
12	The line joining (-5, -2.5) and (5, -6.5)

A	2
B	1
C	$-\frac{3}{2}$
D	4
E	-2
F	$\frac{1}{4}$
G	$-\frac{2}{5}$
H	$\frac{3}{2}$
I	-1
J	$-\frac{1}{2}$
K	$\frac{2}{3}$
L	3

1	2	3	4	5	6	7	8	9	10	11	12
A	I	F	H	E	J	B	D	L	K	C	G