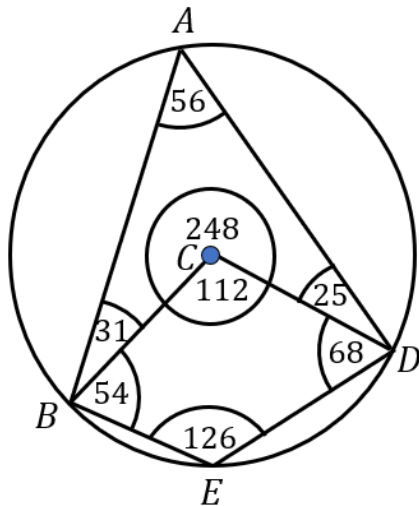


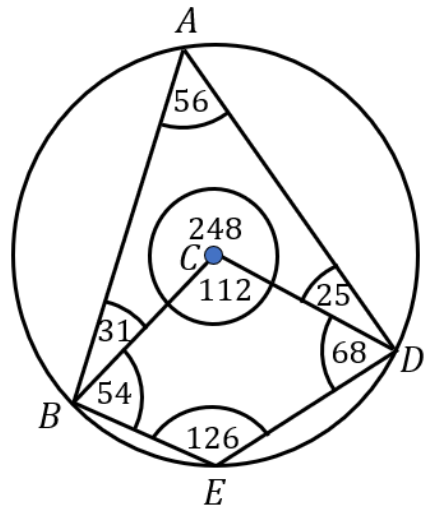
Angle Notation in Circle Theorems



Write down the size of the following angles:

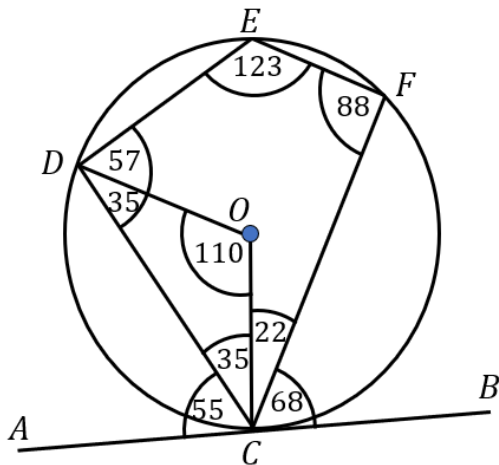
- (a) ABC
- (b) BED
- (c) BAD
- (d) EDC
- (e) CDA
- (f) EBA
- (g) the obtuse angle DCB
- (h) the reflex angle DCB

Angle Notation in Circle Theorems



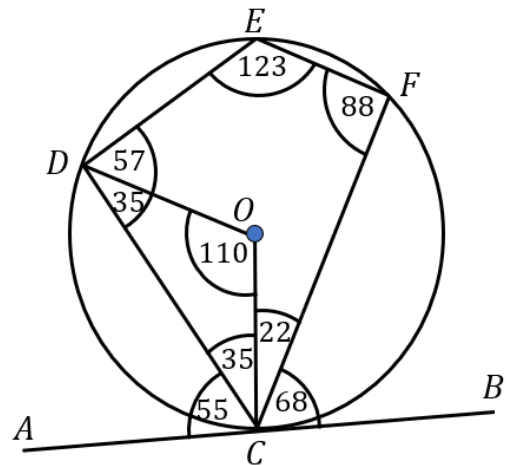
Write down the size of the following angles:

- (a) ABC
- (b) BED
- (c) BAD
- (d) EDC
- (e) CDA
- (f) EBA
- (g) the obtuse angle DCB
- (h) the reflex angle DCB



Write down the size of the following angles:

- (a) DEF
- (b) CFE
- (c) OCD
- (d) DCA
- (e) BCF
- (f) OCA
- (g) DCB
- (h) EDC



Write down the size of the following angles:

- (a) DEF
- (b) CFE
- (c) OCD
- (d) DCA
- (e) BCF
- (f) OCA
- (g) DCB
- (h) EDC