

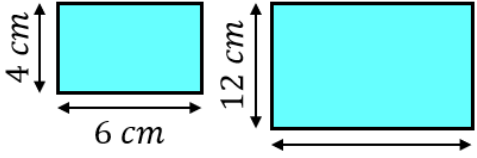
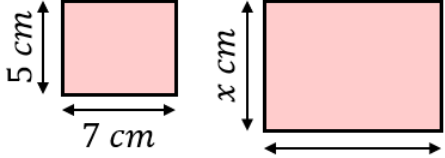
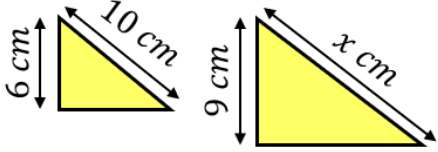
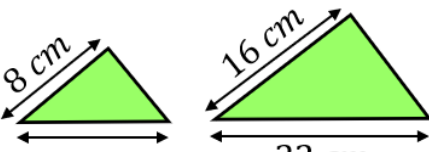
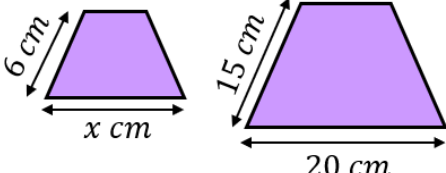
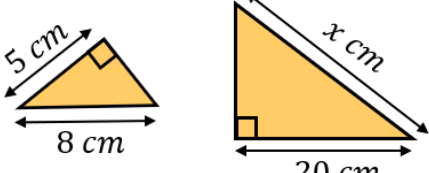
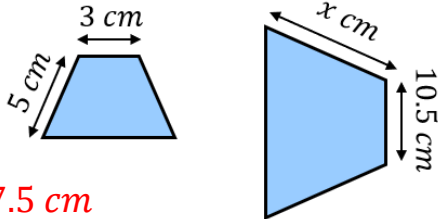
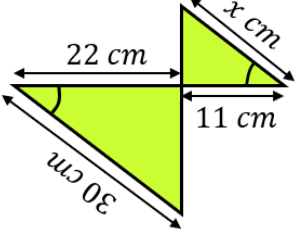
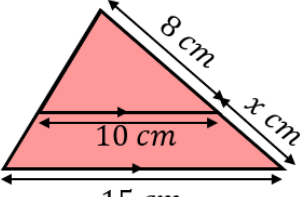
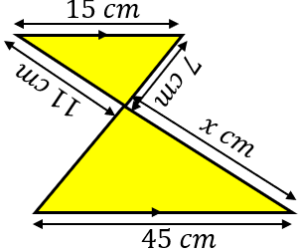
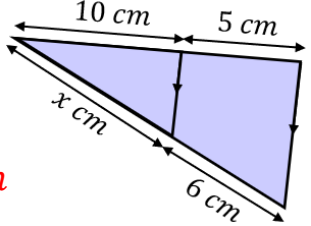
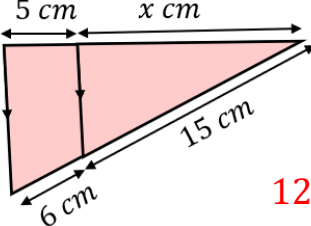


Crack the Code



Similar Shapes

Find the missing lengths in each of these pairs of similar shapes.

A	 <p>18 cm</p>	B	 <p>10 cm</p>
C	 <p>15 cm</p>	D	 <p>11 cm</p>
E	 <p>8 cm</p>	F	 <p>32 cm</p>
G	 <p>17.5 cm</p>	H	 <p>15 cm</p>
I	 <p>4 cm</p>	J	 <p>33 cm</p>
K	 <p>12 cm</p>	L	 <p>12.5 cm</p>

To get the three-digit code, add together all your answers. 188