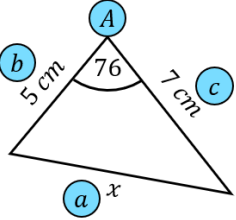
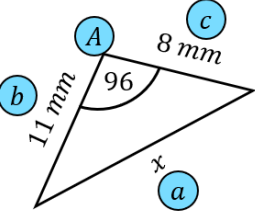
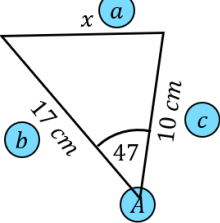
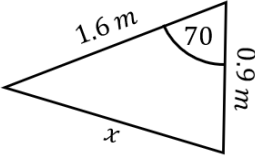
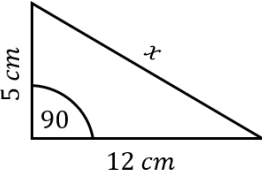
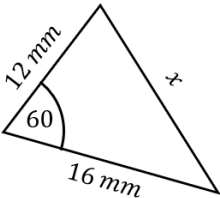


Fill in the Blanks

Finding Lengths Using Cosine Rule

Labelled diagram	Substitute into formula	x^2	x to 1dp
	$x^2 = 7^2 + 5^2 - 2 \times 7 \times 5 \times \cos 76$	$x^2 = 57.065..$	
	$x^2 = 11^2 + 8^2 - 2 \times 11 \times 8 \times \cos 96$		
			
			
			
			
	$x^2 = 32^2 + 14^2 - 2 \times 32 \times 14 \times \cos 53$		