

### Two Set Venn Diagrams

$$\xi = \{\text{Integers from 1 to 12}\}$$

$$A = \{\text{multiples of 2}\}$$

$$B = \{\text{multiples of 3}\}$$

- Show these sets on a Venn diagram
- List the elements of  $A \cap B$
- List the elements of  $A'$
- List the elements of  $A' \cup B$

### Two Set Venn Diagrams

$$\xi = \{\text{Integers from 1 to 12}\}$$

$$A = \{\text{multiples of 2}\}$$

$$B = \{\text{multiples of 3}\}$$

- Show these sets on a Venn diagram
- List the elements of  $A \cap B$
- List the elements of  $A'$
- List the elements of  $A' \cup B$

$$\xi = \{\text{Integers from 1 to 10}\}$$

$$A = \{\text{Integers five or less}\}$$

$$B = \{\text{factors of 12}\}$$

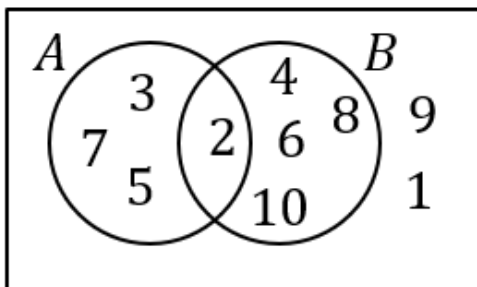
- Show these sets on a Venn diagram
- List the elements of  $A \cup B$
- List the elements of  $B'$
- List the elements of  $A' \cap B'$

$$\xi = \{\text{Integers from 1 to 10}\}$$

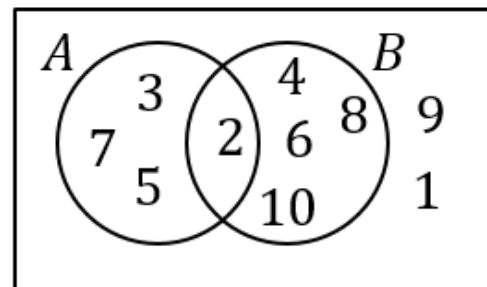
$$A = \{\text{Integers five or less}\}$$

$$B = \{\text{factors of 12}\}$$

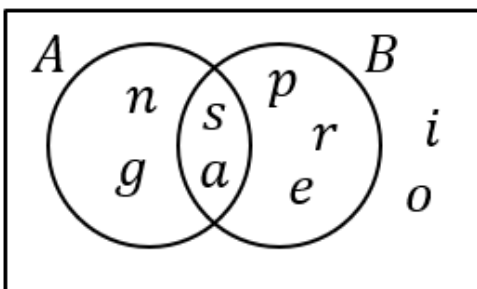
- Show these sets on a Venn diagram
- List the elements of  $A \cup B$
- List the elements of  $B'$
- List the elements of  $A' \cap B'$



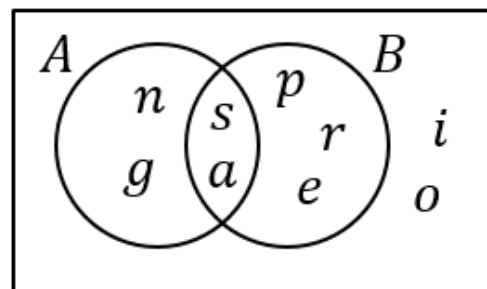
- List the elements of  $A \cap B$
- List the elements of  $(A \cap B)'$
- List the elements of  $B'$



- List the elements of  $A \cap B$
- List the elements of  $(A \cap B)'$
- List the elements of  $B'$



- List the elements of  $A \cup B$
- List the elements of  $(A \cup B)'$
- List the elements of  $A' \cap B'$



- List the elements of  $A \cup B$
- List the elements of  $(A \cup B)'$
- List the elements of  $A' \cap B'$