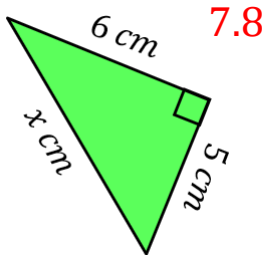
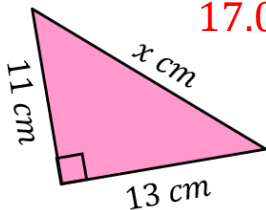
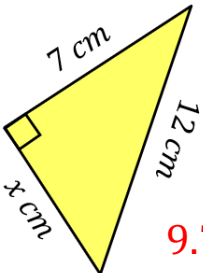
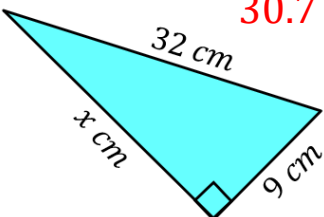
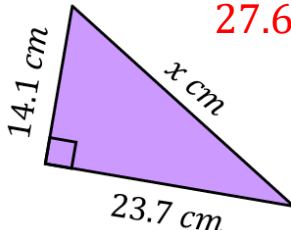
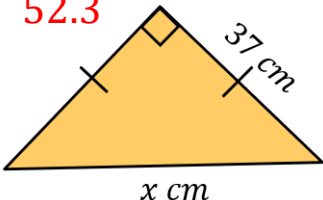
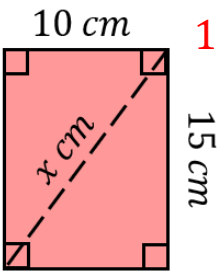
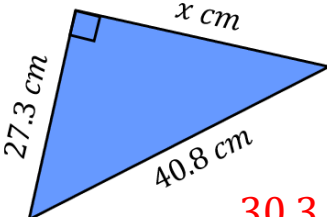
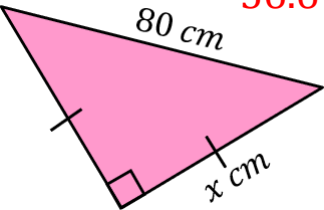
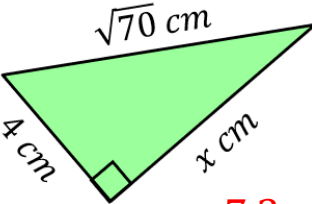
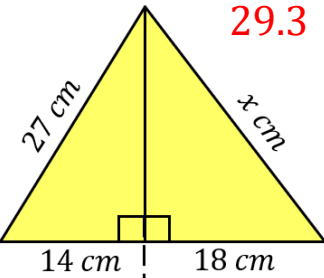
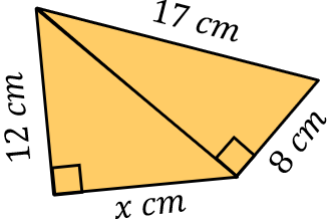
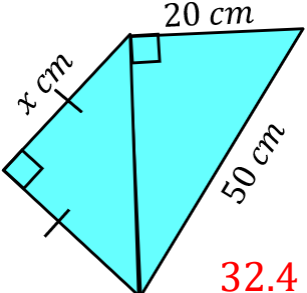


Crack the Code

Pythagoras' Theorem

A		B		C	
D		E		F	
G		H		I	<p>Find the length of the diagonal of a square of side length 20 cm.</p> <p style="text-align: right;">28.3</p>
J		K	<p>Find the length of the diagonal of a rectangle of length 25 cm and width 18 cm.</p> <p style="text-align: right;">30.8</p>	L	
M		N		O	

Round each of your answers to 1 decimal place. To get the three-digit code, add together all your answers and round to the nearest integer. **387.1 → 387**