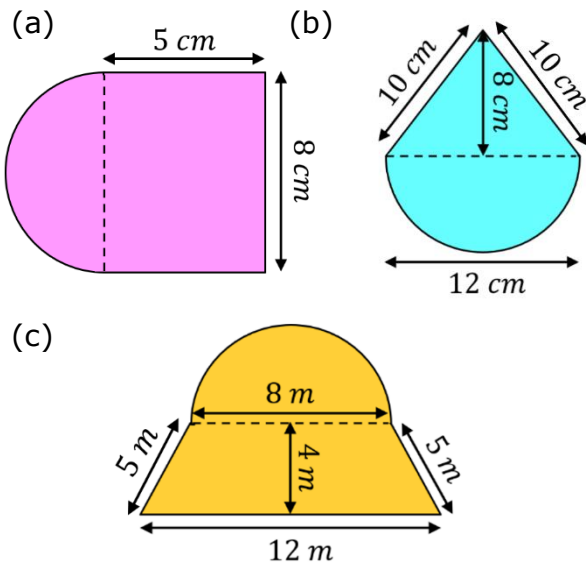


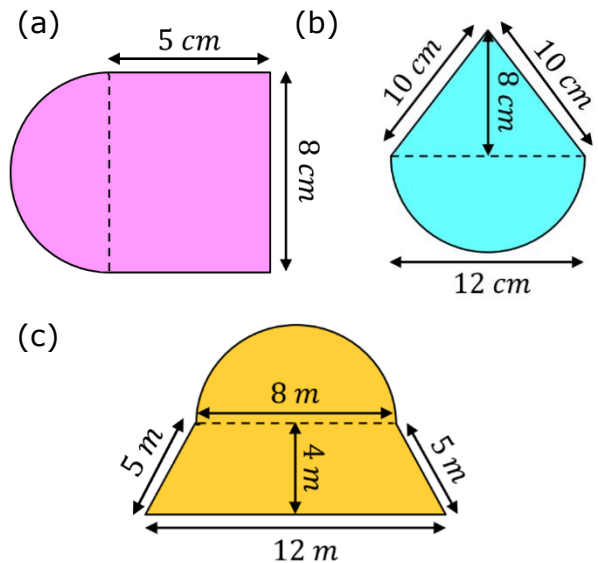
Harder Compound Shapes

Find the area and perimeter of each of these compound shapes, giving your answers to 1 decimal place.

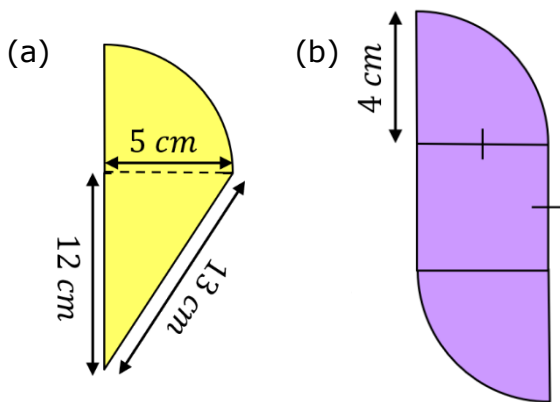


Harder Compound Shapes

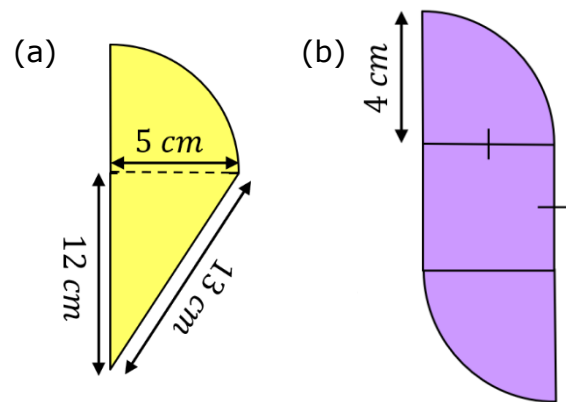
Find the area and perimeter of each of these compound shapes, giving your answers to 1 decimal place.



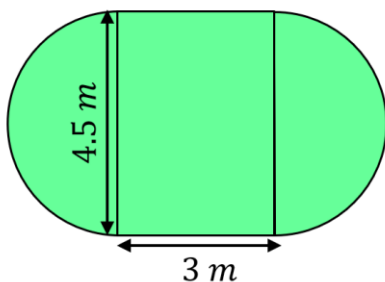
Find the area and perimeter of each of these compound shapes, giving your answers to 1 decimal place.



Find the area and perimeter of each of these compound shapes, giving your answers to 1 decimal place.



The plan of a lawn is shown below. A gardener wants to re-turf the lawn and add a fence around the perimeter of the lawn. Turf costs £4.75 per m^2 and fencing costs £9 per metre. How much will it cost?



The plan of a lawn is shown below. A gardener wants to re-turf the lawn and add a fence around the perimeter of the lawn. Turf costs £4.75 per m^2 and fencing costs £9 per metre. How much will it cost?

