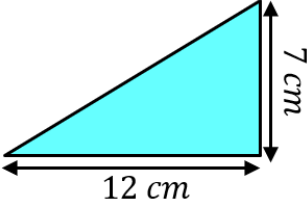
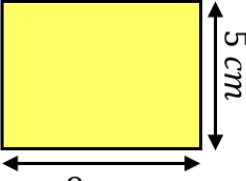
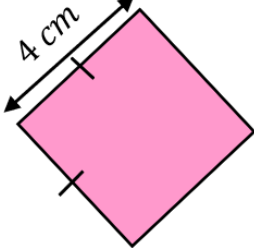
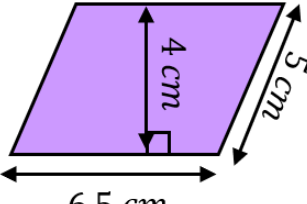
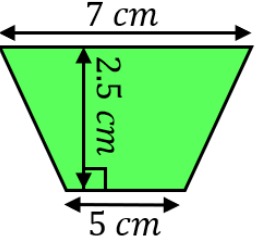
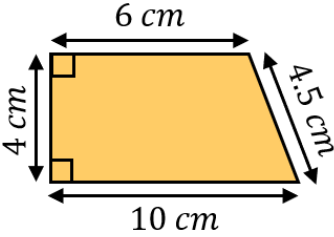
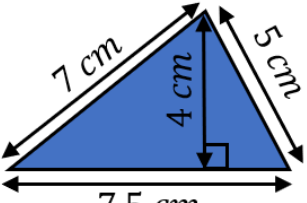
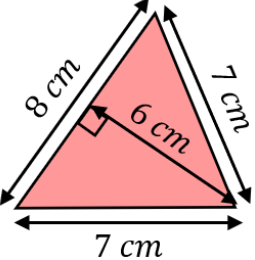
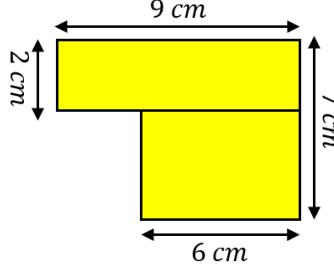
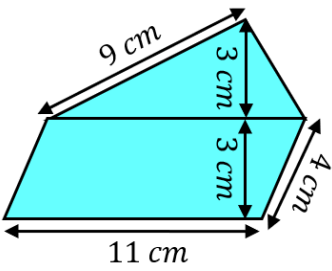
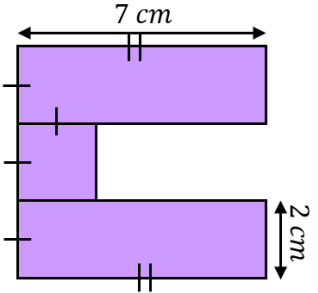
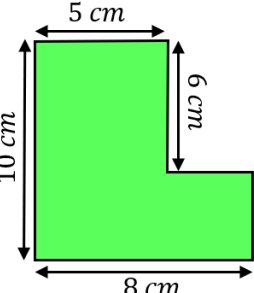
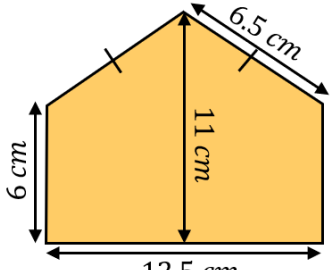
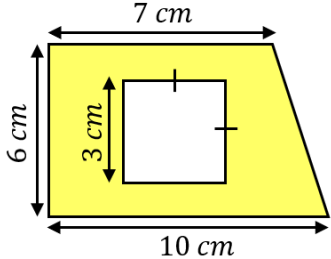
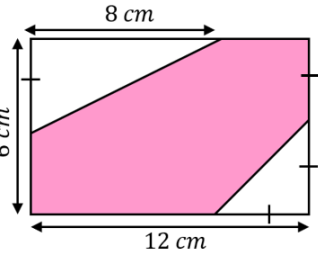


# Crack the Code

# Area of 2D Shapes

<b>A</b>		<b>B</b>		<b>C</b>	
<b>D</b>		<b>E</b>		<b>F</b>	
<b>G</b>		<b>H</b>		<b>I</b>	
<b>J</b>		<b>K</b>		<b>L</b>	
<b>M</b>		<b>N</b>		<b>O</b>	

To get the three-digit code, add together all your answers and round to the nearest integer.