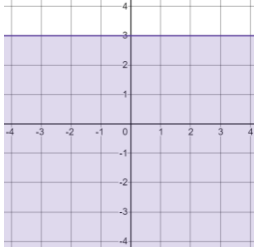
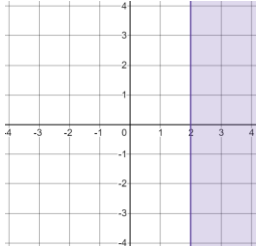
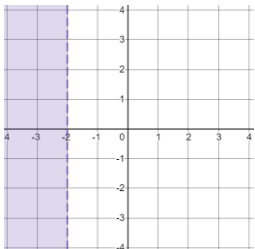
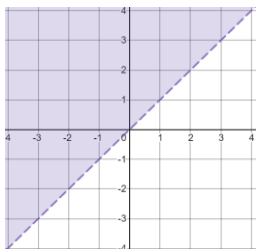
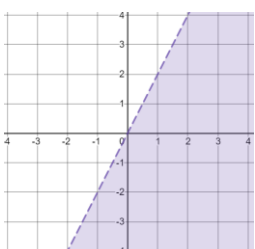
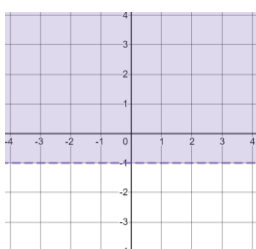
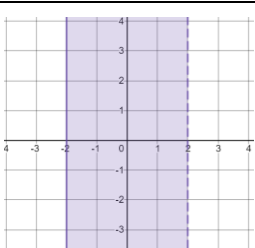
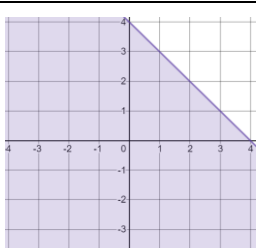
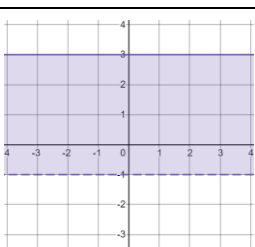
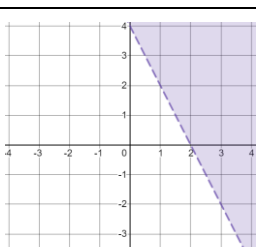
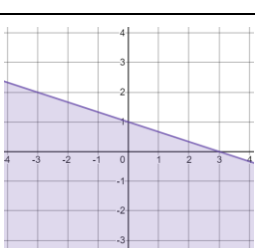
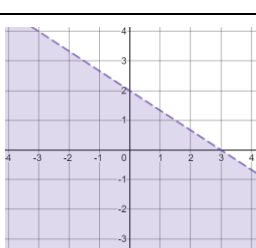


Match-Up

Graphical Inequalities

1		2	
3		4	
5		6	
7		8	
9		10	
11		12	

A	$x \geq 2$
B	$y > x$
C	$2x + y > 4$
D	$x < -2$
E	$y \leq 3$
F	$2x + 3y < 6$
G	$x + y \leq 4$
H	$-1 < y \leq 3$
I	$y < 2x$
J	$y > -1$
K	$-2 \leq x < 2$
L	$x + 3y \leq 3$

1	2	3	4	5	6	7	8	9	10	11	12
E	A	D	B	I	J	K	G	H	C	L	F