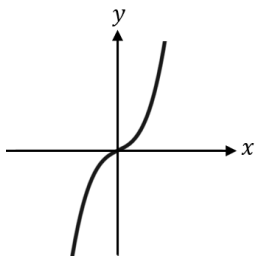
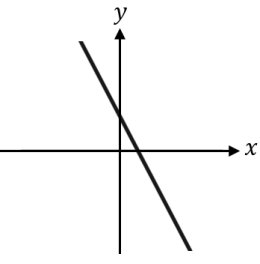
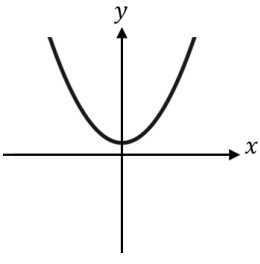
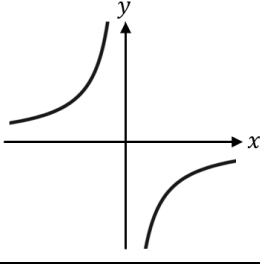
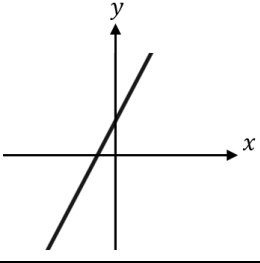
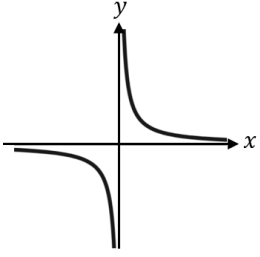
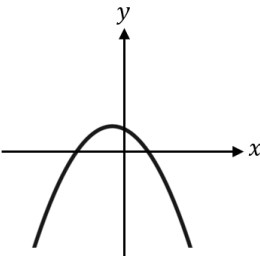
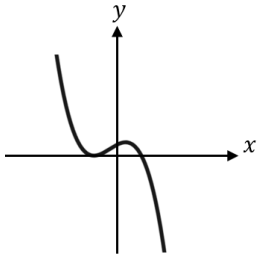
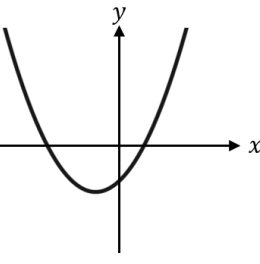
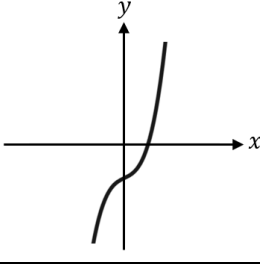
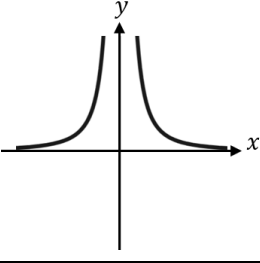
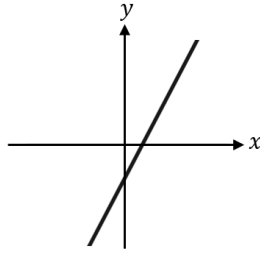


Match-Up

Recognising Graphs

1	
2	
3	
4	
5	
6	

7	
8	
9	
10	
11	
12	

A	$y = x^2 + 2x - 3$
B	$y = \frac{2}{x}$
C	$y = x^3 + x$
D	$y = -\frac{10}{x}$
E	$y = 3 - 2x$
F	$y = 2 - x - x^2$
G	$y = 2x^3 + x - 3$
H	$y = 2x - 3$
I	$y = \frac{5}{x^2}$
J	$y = x^2 + 1$
K	$y = 1 + x - x^2 - x^3$
L	$y = 2x + 3$

1	2	3	4	5	6	7	8	9	10	11	12
C	E	J	D	L	B	F	K	A	G	I	H