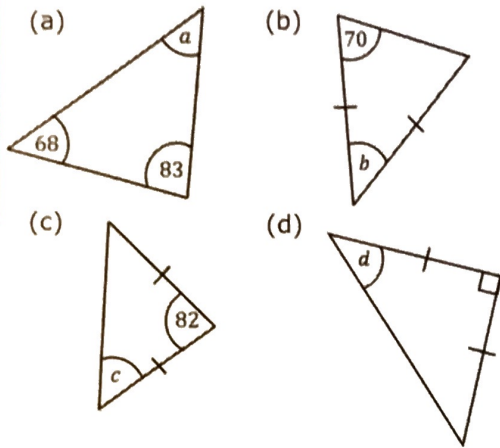


Angles in Triangles

Find the missing angles.



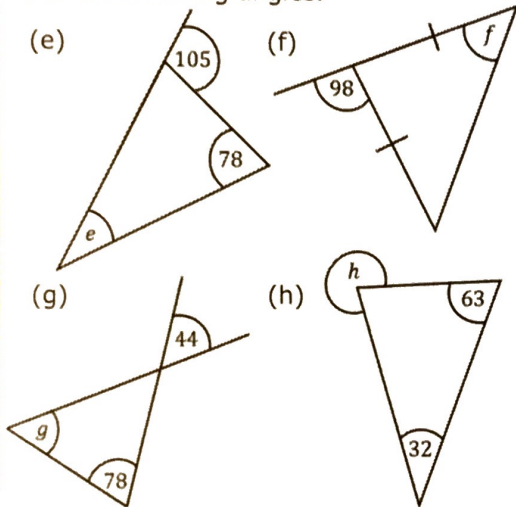
$$(a) a = 29^\circ$$

$$(b) b = 40^\circ$$

$$(c) c = 49^\circ$$

$$(d) d = 45^\circ$$

Find the missing angles.



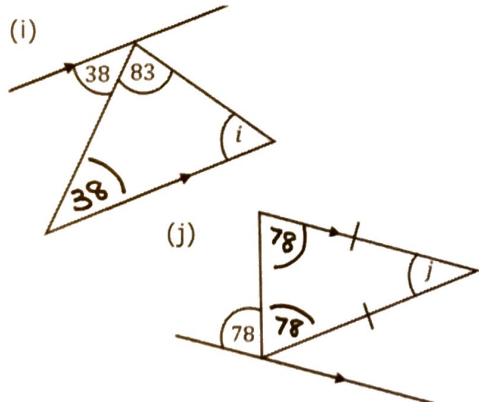
$$(e) e = 27^\circ$$

$$(f) f = 49^\circ$$

$$(g) g = 58^\circ$$

$$(h) h = 27^\circ$$

Find the missing angles.



$$(i) i = 59^\circ$$

$$(j) j = 24^\circ$$