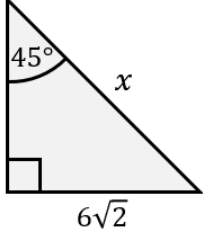
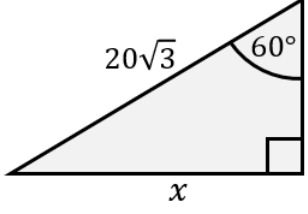
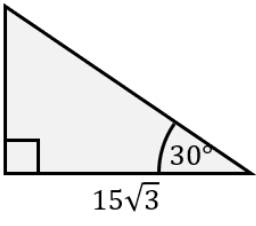
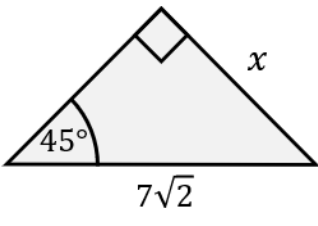
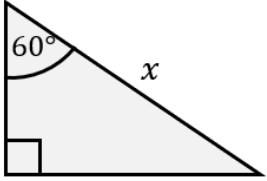
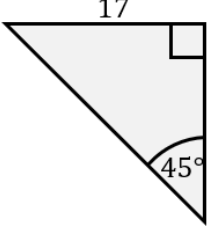
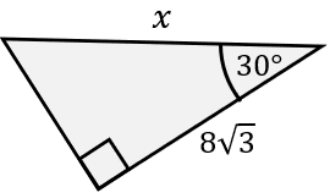
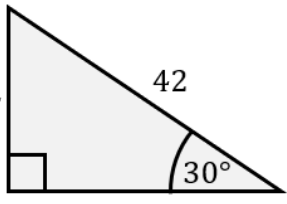
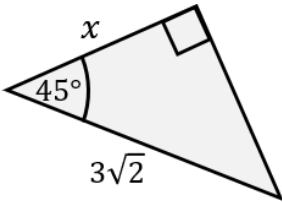
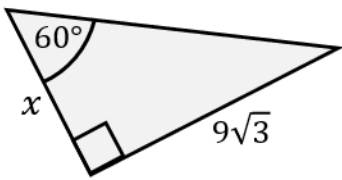
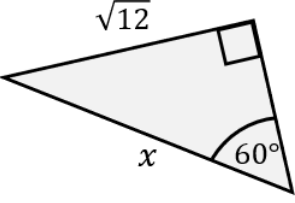
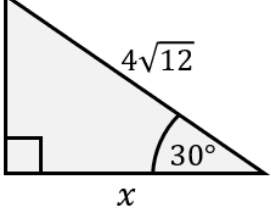


# Crack the Code

# Exact Trigonometric Values

Find the value of  $x$  in each of the questions below, without using a calculator.

<b>A</b>		<b>12</b>	<b>B</b>		<b>30</b>
<b>C</b>		<b>15</b>	<b>D</b>		<b>7</b>
<b>E</b>		<b>56</b>	<b>F</b>		<b>17</b>
<b>G</b>		<b>16</b>	<b>H</b>		<b>21</b>
<b>I</b>		<b>3</b>	<b>J</b>		<b>9</b>
<b>K</b>		<b>4</b>	<b>L</b>		<b>12</b>

To get the three-digit code, add all your answers together and round to the nearest integer. **202**