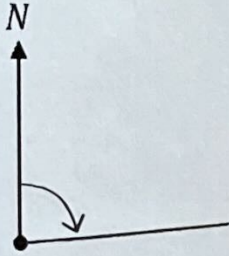


## Drawing Bearings

For each question, draw a line on the bearing given:

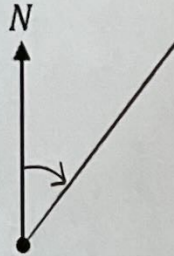
**(a)**

085°



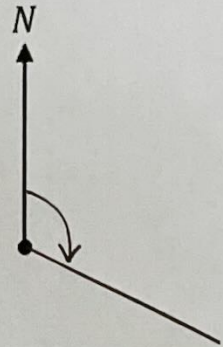
**(b)**

040°



**(c)**

115°



**(d)**

155°



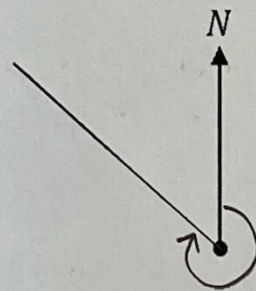
**(e)**

200°



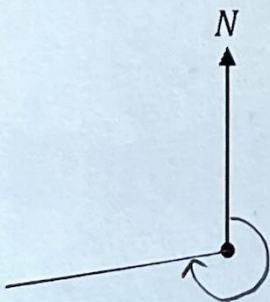
**(f)**

310°



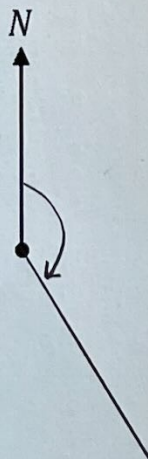
**(g)**

262°



**(h)**

148°



**(i)**

327°

